

Thévenin's Theorem

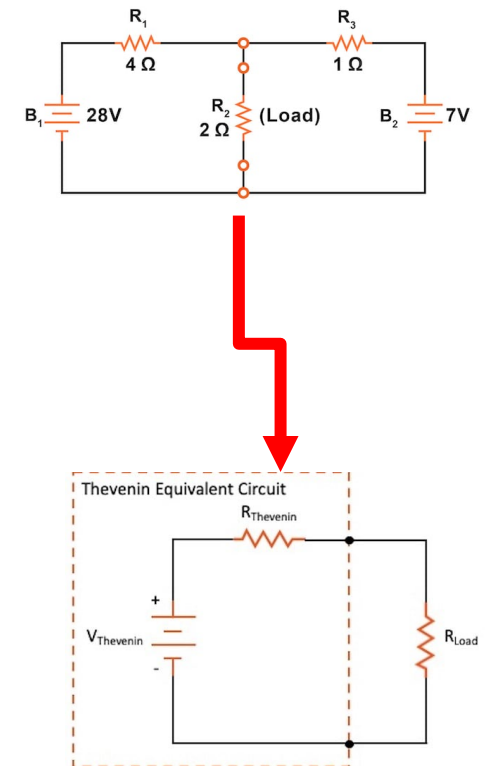


|
&
|

**UNIVERSITY
CENTRE**

What is Thévenin's theorem

- Thévenin's Theorem simplifies any **linear circuit into an equivalent circuit**.
- The equivalent circuit consists of:
 - A single **voltage source** (V_{th})
 - In series with a single **resistor** (R_{th}) as seen from the terminals of the load.
- This equivalent circuit is viewed from the terminals of the load resistor.
- It makes circuit analysis easier — especially when testing different load values.
- Commonly used to:
 - Simplify complex networks
 - Analyse load current, voltage, and power efficiently

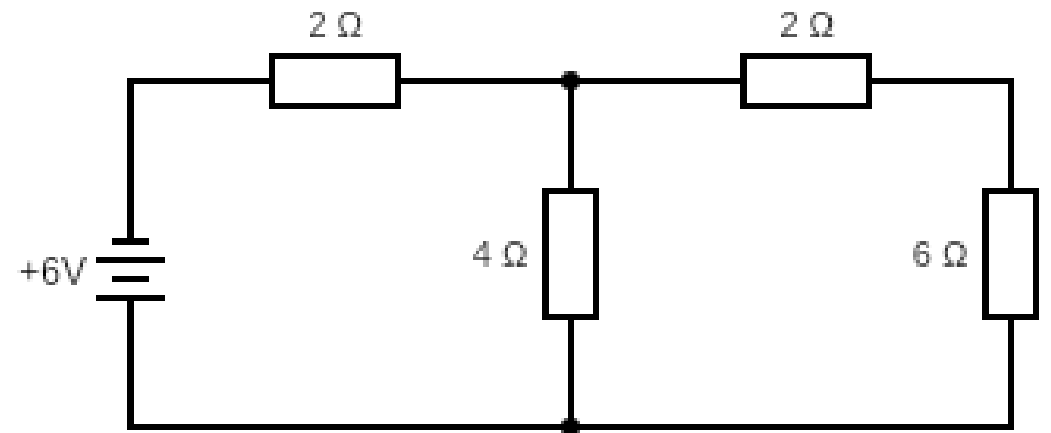


How to find the (V_{th}) and (R_{th})

- **To find (V_{th}) (Open-Circuit Voltage)**
 - Remove the load resistor from the circuit.
 - Measure or calculate the voltage across the open terminals — this is (V_{th}).
 - All sources remain active (voltage and current sources stay connected).
- **To find (R_{th}) (Equivalent Resistance)**
 - Remove the load resistor.
 - Turn off all independent sources:
 - Replace voltage sources with short circuits (0 V).
 - Replace current sources with open circuits (0 A).
 - Then, calculate the total resistance seen from the load terminals.

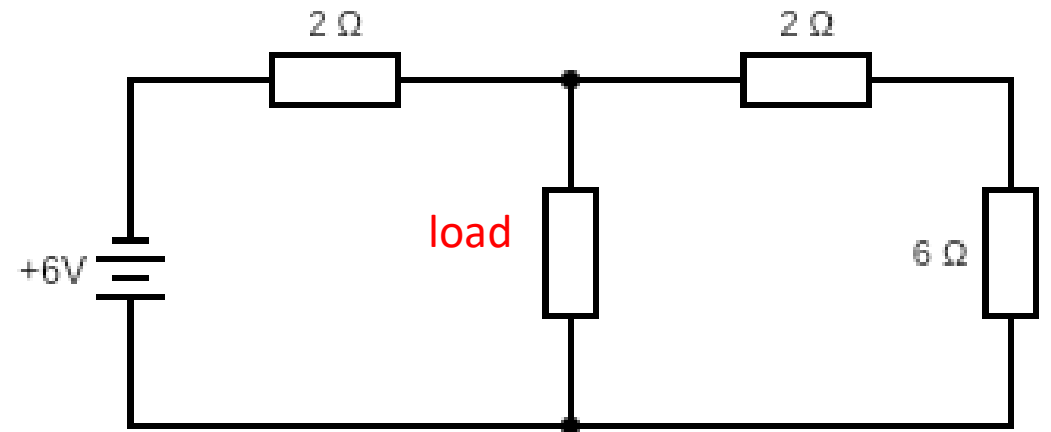
Example

- Our first step is to decide which resistor is our load (often this is given to us but not always)
- For this we are using the 4-ohm resistor as our load



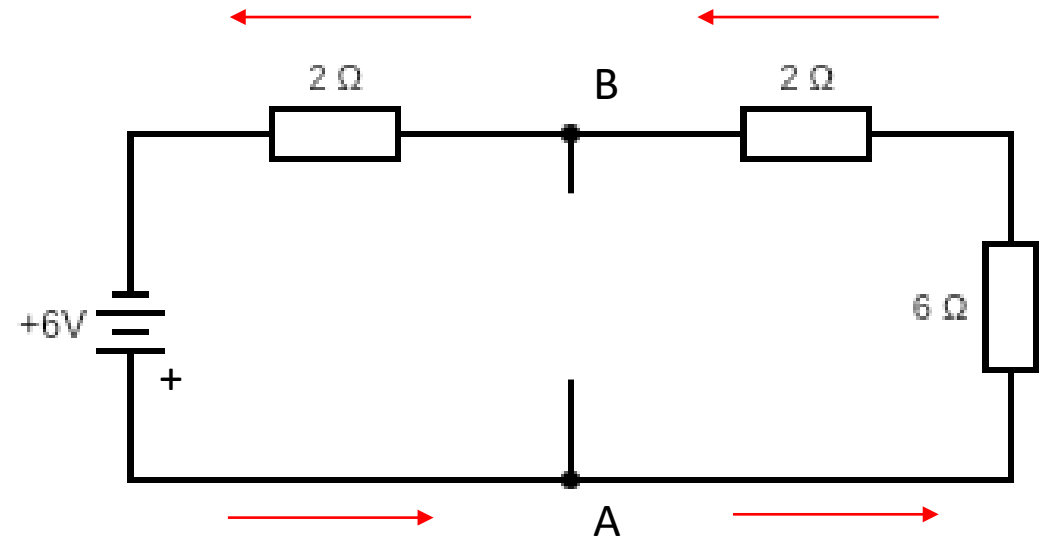
Example

- We will start by working out our (V_{th})
- To do this we must keep the voltage source and other components and just remove the load
- Then we will work out the voltage at both terminals



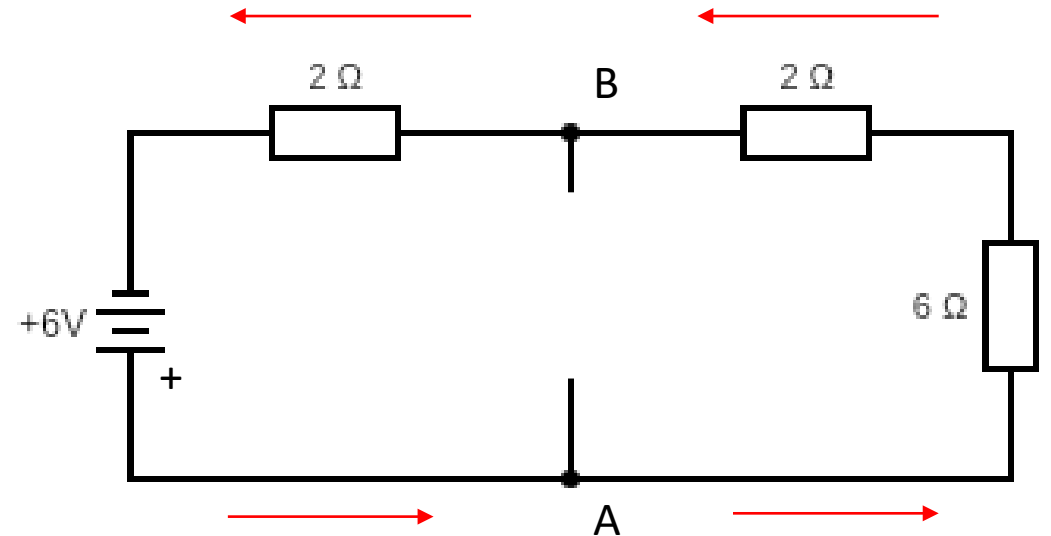
Example

- So we have first have to work out the current through the circuit
- We can do so by working out the total resistance $(2+2+6)=10$
- Then we can work out $I = \frac{V}{R}$
- $\frac{6}{10} = 0.6A$



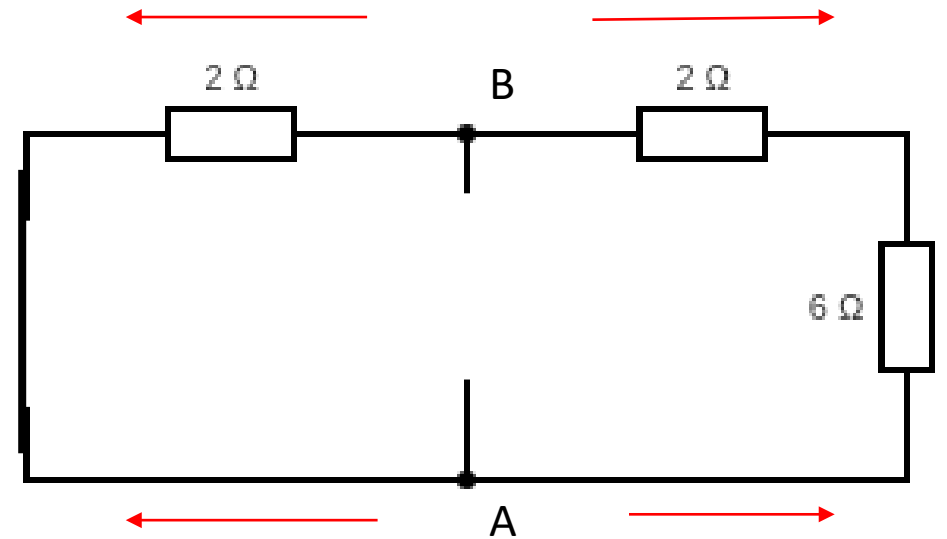
Example

- $\frac{6}{10} = 0.6A$
- So now we can work out our voltages
- At A we have 6v as there is no drop yet
- At B we have $6 - 6 * 0.6 - 2 * 0.6 = 1.2v$
- So the voltage between A and B is $6 - 1.2 = 4.8$



Example

- Next we need to work out the equivalent resistance, so we also treat the voltage source as a wire
- So for this circuit we have two parallel circuits
- $R_{th} = \frac{1}{\frac{1}{2} + \frac{1}{2+6}} = 1.6$



Example

- Finally, we can draw our equivalent circuit
- With our values we just worked out

